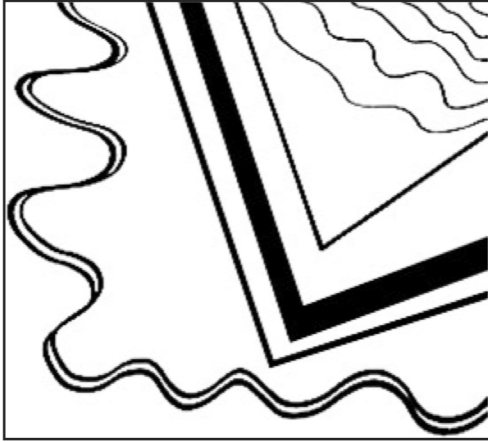



ARTFUL MATH – Line Designs and Estimation

A



B




COMPARE

1. How are the designs the same?
2. How are the designs different?
3. How do the designs make you feel? Why?


ESTIMATE

1. Estimate the length of the longest line.
2. Measure to check your answer.
3. How close were you?
4. Estimate the total number of lines in both designs.
5. Count to check your answer.
6. What did you do to make your estimations?

ARTFUL MATH – Line Designs and Estimation



A



B

COMPARE the 2 designs.

1. How are the designs the same?
2. How are the designs different?
3. How do the designs make you feel? Why?

ESTIMATE

1. Estimate the length of the longest line.
2. Measure to check your answer.
3. How close were you?
4. Estimate the total number of lines in both designs.
5. Count to check your answer.
6. What did you do to make your estimations?